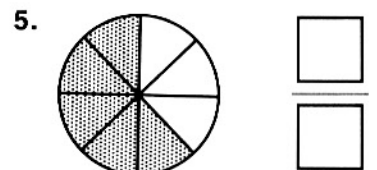
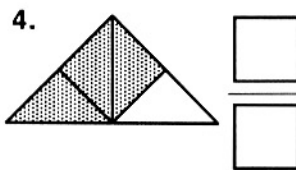
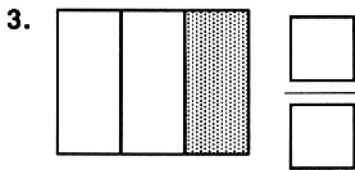
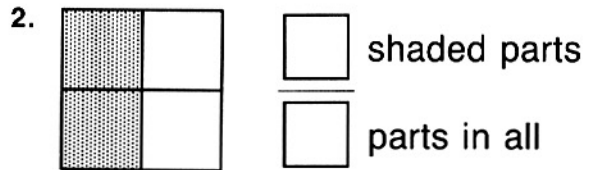
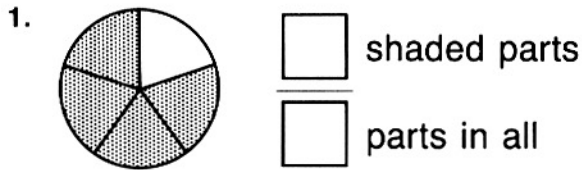


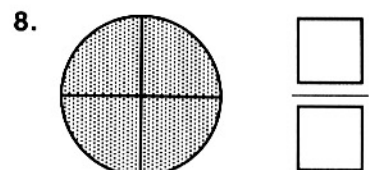
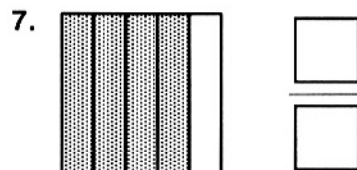
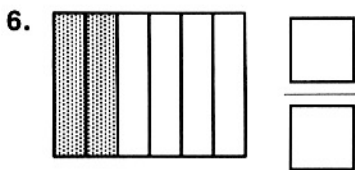
Name _____

Exploring Fractions

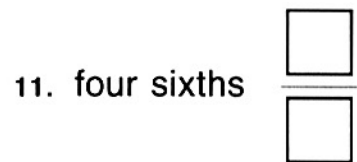
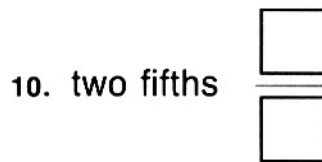
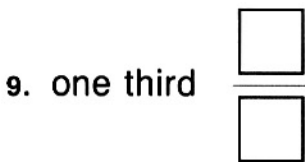
Write the fraction for the part that is shaded.
Then say the fraction.



Write the fraction for the part that is shaded.

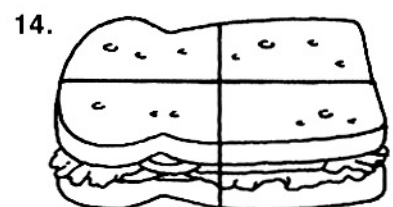




Write the fraction for each word name.



EVERYDAY MATH CONNECTION

Many foods must be divided into fractional parts in order for people to share them. Shade one fourth of each food item to show one serving out of four.



Exploring Fractions

Answer Key

1. $\frac{4}{5}$; four fifths
2. $\frac{2}{4}$; two fourths
3. $\frac{1}{3}$; one third
4. $\frac{3}{4}$; three fourths
5. $\frac{5}{8}$; five eighths
6. $\frac{2}{6}$
7. $\frac{4}{5}$
8. $\frac{4}{4}$
9. $\frac{1}{3}$
10. $\frac{2}{5}$
11. $\frac{4}{6}$
- 12.–14. Shade one fourth.

