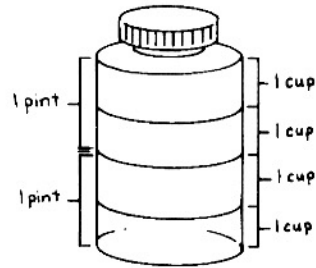
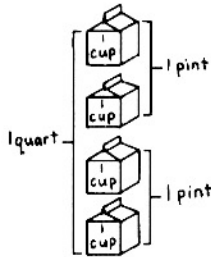


Name _____

Quarts, Pints, and Cups

Which hold the same amounts?
Color the cups to show the amount.



1. Pint 

2. Quart 

Solve.

3. Darren has 1 pint of juice.
How many cups can he fill?
_____ cups


4. Marta has 1 quart of juice.
How many cups can she fill?
_____ cups


5. Lani has 3 cups of juice.
Beth has 1 quart of juice.
Who has more juice?

6. Kim has 1 quart of juice.
He drinks 1 cup of it. How much does he have left?

Number Sense

Ring the better estimate.

7. 
more than 1 quart
less than 1 quart

8. 
more than 1 cup
less than 1 cup

Quarts, Pints, and Cups

Answer Key

1. Color 2 cups.
2. Color 4 cups.
3. 2
4. 4
5. Beth
6. 3 cups
7. less than 1 quart
8. more than 1 cup

