


Name _____

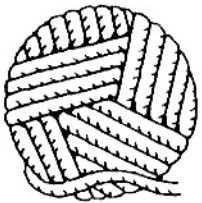
Inches and Feet

Use an inch ruler to draw pieces of yarn.


1. 2 inches



2. 5 inches



3. 3 inches




Ring in green the longest piece of yarn.
Ring in red the shortest piece of yarn.

Number Sense

Think about the real object.
Ring the better estimate.

4.



longer than 1 foot
shorter than 1 foot



longer than 1 foot
shorter than 1 foot

Inches and Feet

Answer Key

- 1.–3. Check work.
4. shorter than 1 foot
5. longer than 1 foot

