

Name _____

Counting Change


Work with a friend.

Count up from the price to find the change.

Count out the change to your friend.


1. You have 70¢.
You buy




59¢ 60 ¢ 70 ¢
You have 12 ¢ change.


2. You have 45¢.
You buy




39¢ _____ ¢ _____ ¢
You have _____ ¢ change.

3. You have 65¢.
You buy




53 ¢ _____ ¢ _____ ¢ _____ ¢
You have _____ ¢ change.

Number Sense

Solve.

4. Janine has 50¢ to spend.
She buys a pin for 24¢.
Use the fewest coins possible to show Janine's change.

Counting Change

Answer Key

1. 60; 70; 12
2. 40; 45; 7
3. 54; 55; 65; 13
4. 25¢, 1¢

