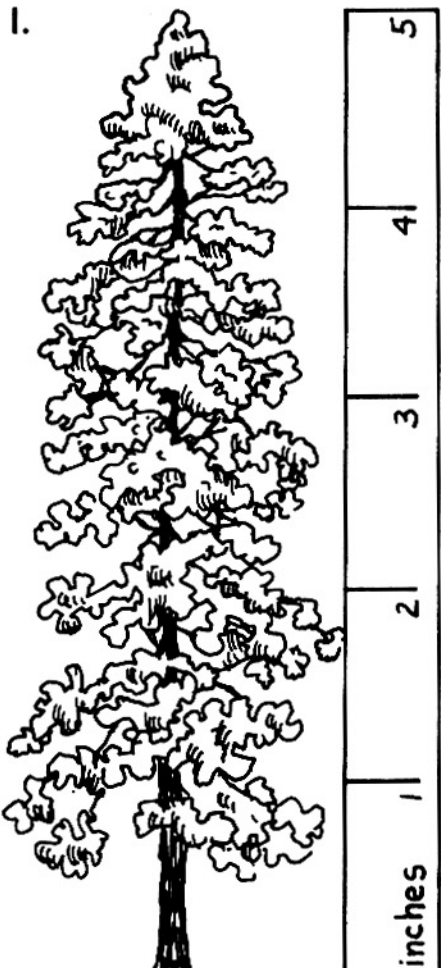




Name _____

Measuring in Inches

Use your inch ruler to measure.
Write how many inches tall.

1. 
_____ inches

2. 
_____ inches


4. 
_____ inches

3. 
_____ inches

Reasoning

5. What is the name of this shape?

6. Measure the sides.
What did you find out?



Measuring in Inches

Answer Key

1. 5
2. 2
3. 4
4. 1
5. rectangle
6. Two sides are 1 inch tall. Two sides are 2 inches long.

