

Name _____

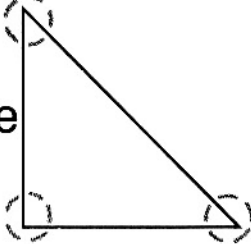
Sides and Corners

Trace each side  .

Draw a   on each corner.


Write how many sides and corners.

1. corner



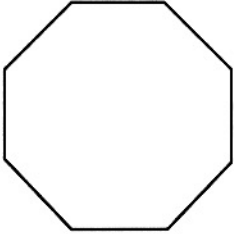
3 sides
3 corners

2.



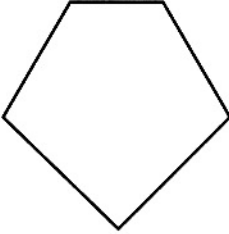
_____ sides
_____ corners

3.



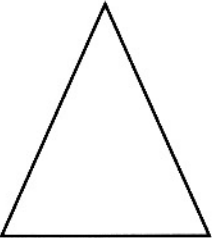
_____ sides
_____ corners

4.



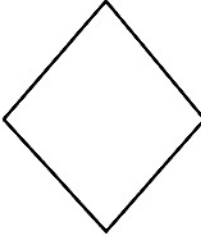
_____ sides
_____ corners

5.



_____ sides
_____ corners

6.



_____ sides
_____ corners

Reasoning

7. What kind of figure has 2 sides and 1 corner?
Ring the answer.

open figure closed figure

Sides and Corners

Answer Key

1.–6. Check coloring.

1. 3, 3

2. 4, 4

3. 8, 8

4. 5, 5

5. 3, 3

6. 4, 4

7. open figure

