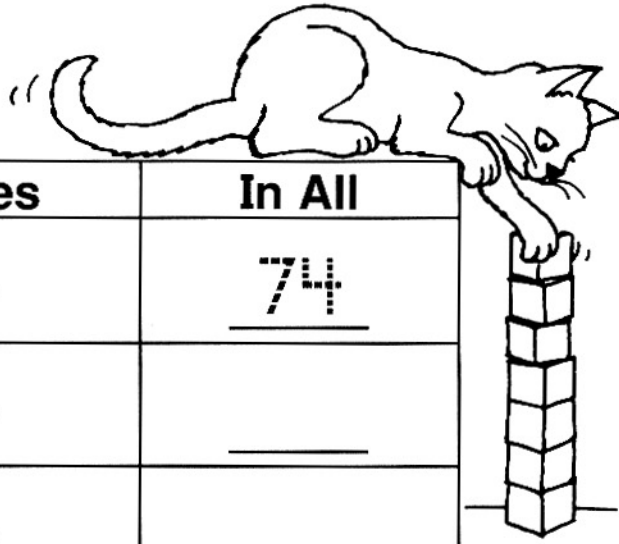


Name \_\_\_\_\_

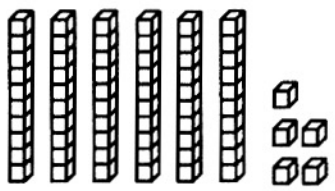
# Tens and Ones to 100

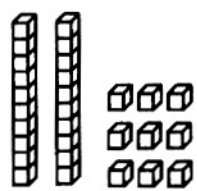
Use place-value models.  
Complete the table.

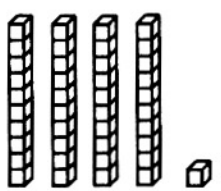


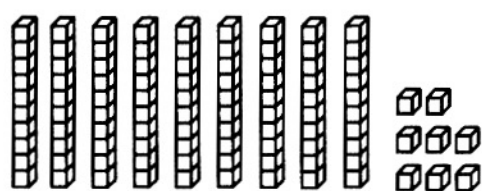
1.	Tens	Ones	In All
	7	4	<u>74</u>
	8	4	_____
	9	4	_____

Count. Write how many in all.

2.  \_\_\_\_\_  
65

3.  \_\_\_\_\_  
\_\_\_\_\_

4.  \_\_\_\_\_  
\_\_\_\_\_

5.  \_\_\_\_\_  
\_\_\_\_\_

## Number Sense

6. Ring the number that is less.

8 tens 6 ones

7 tens 6 ones

# Tens and Ones to 100

## Answer Key

---

1. 74, 84, 94
2. 65
3. 29
4. 41
5. 98
6. 7 tens 6 ones

