




Name _____


More Subtraction Sentences

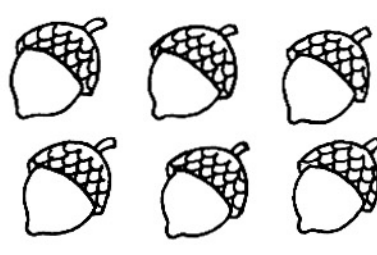
Cross out. Then write how many are left.


1. 
 $4 - 2 = 2$

2. 
 $6 - 1 = \underline{\quad}$

3. 
 $5 - 2 = \underline{\quad}$


4. 
 $4 - 1 = \underline{\quad}$

5. 
 $6 - 2 = \underline{\quad}$

6. 
 $5 - 0 = \underline{\quad}$

Story Corner

7. Tell a story to a friend.
Write the subtraction sentence.


 $\underline{\quad} - \underline{\quad} = \underline{\quad}$

More Subtraction Sentences

Answer Key

1. 2
2. 5
3. 3
4. 3
5. 4
6. 5
7. $6 - 3 = 3$

