

Name _____

Addition Sentences


Write the addition sentences.

1.




$$\underline{2} + \underline{1} = \underline{3}$$

2.




$$\underline{\quad} + \underline{\quad} = \underline{\quad}$$

3.




$$\underline{\quad} + \underline{\quad} = \underline{\quad}$$

4.



$$\underline{\quad} + \underline{\quad} = \underline{\quad}$$

5.



$$\underline{\quad} + \underline{\quad} = \underline{\quad}$$

6.



$$\underline{\quad} + \underline{\quad} = \underline{\quad}$$

Story Corner

7. Tell a story to a friend. Write an addition sentence.



$$\underline{\quad} + \underline{\quad} = \underline{\quad}$$

Addition Sentences

Answer Key

1. $2 + 1 = 3$

2. $2 + 2 = 4$

3. $4 + 1 = 5$

4. $3 + 2 = 5$

5. $5 + 1 = 6$

6. $1 + 2 = 3$

7. $2 + 2 = 4$

