

Name _____

Problem-Solving Strategy

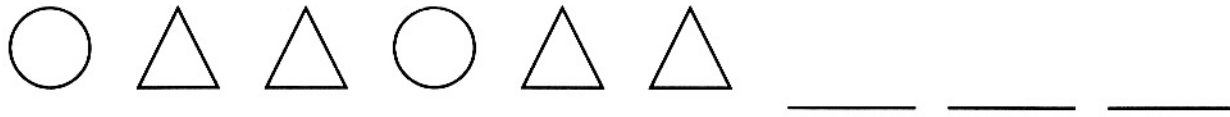
Draw a Picture

Continue each pattern.

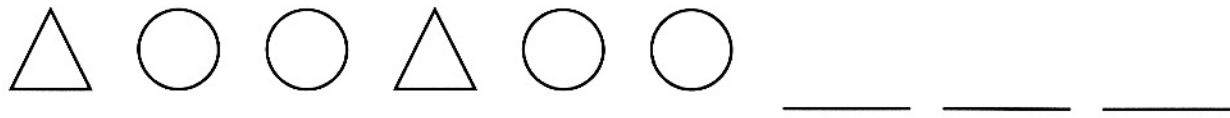
1.



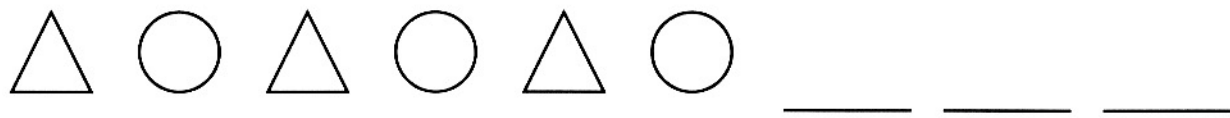
2.



3.



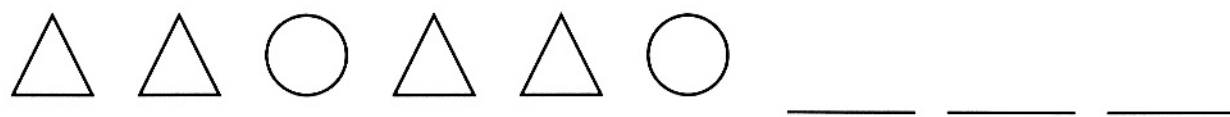
4.



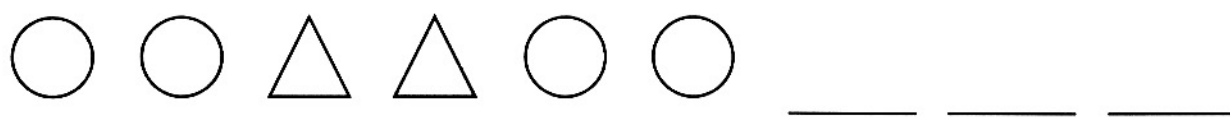
5.



6.



7.



Reasoning

8. Do rows 3 and 6 show the same pattern?

Ring **Yes** or **No**.

Yes

No

Problem-Solving Strategy: Draw a Picture

Answer Key

1. triangle, circle, triangle
2. circle, triangle, triangle
3. triangle, circle, circle
4. triangle, circle, triangle
5. circle, triangle, circle
6. triangle, triangle, circle
7. triangle, triangle, circle
8. No

