


Name \_\_\_\_\_

# Order Through 10



Write the number that comes next.

1. 3, 4, 5 | 2. 4, 5, \_\_\_\_\_

3. 8, 9, \_\_\_\_\_ | 4. 5, 6, \_\_\_\_\_

5. 0, 1, \_\_\_\_\_ | 6. 2, 3, \_\_\_\_\_

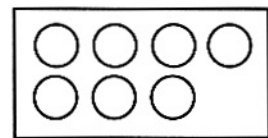
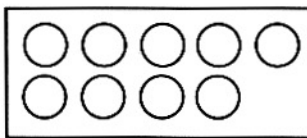
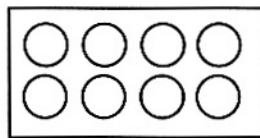
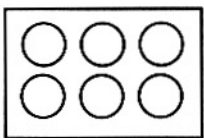
Count backward. Write the missing numbers.

7.  
10, 9, \_\_\_\_\_, \_\_\_\_\_, \_\_\_\_\_, 5, 4, \_\_\_\_\_, 2, \_\_\_\_\_, 0

8.  
10, \_\_\_\_\_, \_\_\_\_\_, 7, 6, \_\_\_\_\_, \_\_\_\_\_, \_\_\_\_\_, \_\_\_\_\_, 1

## Number Sense

9. Ring the group that comes next.



# Order Through 10

## Answer Key

---

1. 5
2. 6
3. 10
4. 7
5. 2
6. 4
7. 8, 7, 6, 3, 1
8. 9, 8, 5, 4, 3, 2
9. Ring last group.

