


Name _____

Four and Five


Write how many.

1.




5





2.








3.










Number Sense

4. Ring the group that has more than 3.

Draw an X on the groups that have the same number.



Four and Five

Answer Key

1. 5, 4, 5
2. 4, 3, 5
3. 2, 4, 3
4. Ring middle group. Draw an X on the first and last groups.

