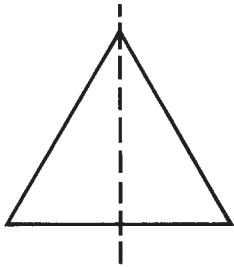


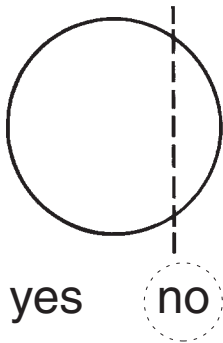
# PRACTICING SYMMETRY



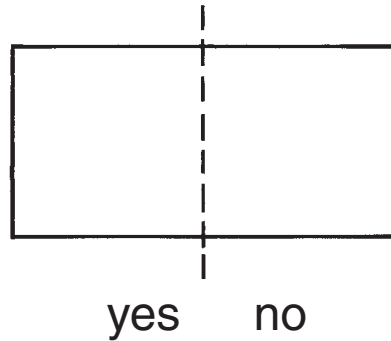
These two parts are the same size and shape. They match.

Do the two parts match? Ring yes or no.

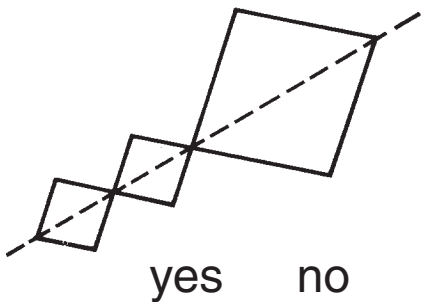
1.



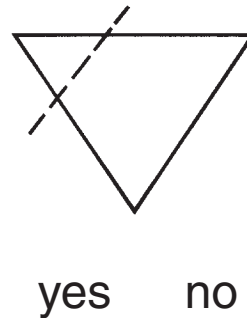
2.



3.

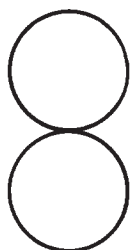


4.




Draw a line to make two parts that match.


5.



6.



7.



# Practicing Symmetry

## Answer Key

---

1. no
2. yes
3. yes
4. no
- 5.–7. Check lines of symmetry.

