

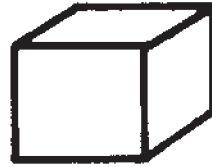
# IDENTIFYING SOLIDS



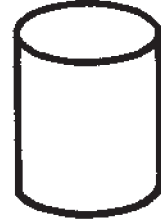
cone



sphere




cube




cylinder

Ring the object that has the same shape.

1.





2.



3.



4.



# Identifying Solids

## Answer Key

---

1. Ring box.
2. Ring ball.
3. Ring construction cone.
4. Ring can.

