



# How Long?

 Which takes more time to complete? Circle it.


1.



2.






3.



## Real World Connection

Solve.

4. Manny has these puzzles.  
Which takes the most time? Circle it.



# How Long?

## Answer Key

---

1. Circle second picture.
2. Circle first picture.
3. Circle second picture.
4. Circle second picture.

