




SAY "WHEN"!

 Circle in green what happened first.
Circle in red what happened last.


1.



2.



3.




Real World Connection

Solve.

4. Rob and Ann sell lemonade.

Write numbers to tell the order these events happen.



_____ 1 _____







Say “When”!

Answer Key

1. Circle the second cup in green and the last cup in red.
2. Circle the first pencil in green and the third pencil in red.
3. Circle the blank paper in green and the finished letter in red.
4. 1, 4, 3, 2

