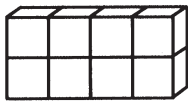


VOLUME USING CUBES

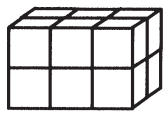
The *volume* is the measure of the inside of a three-dimensional figure. Volume is stated in cubic units.

Find the volume of each shape.

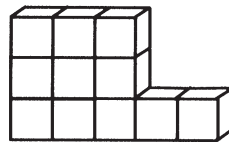
1.



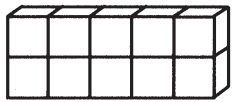
2.



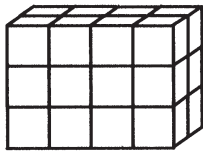
3.



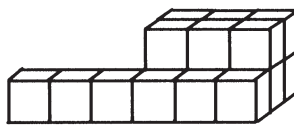
4.



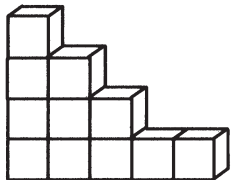
5.



6.




7.



8.



9.



Volume Using Cubes

Answer Key

1. 8 cubic units
2. 12 cubic units
3. 11 cubic units
4. 10 cubic units
5. 24 cubic units
6. 18 cubic units
7. 11 cubic units
8. 3 cubic units
9. 19 cubic units

