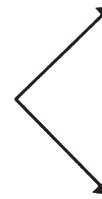

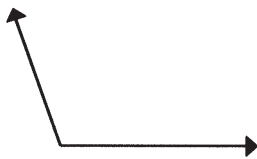




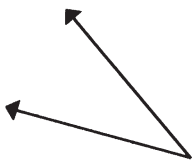
ANGLES

A *right angle* is an angle of 90° . An *acute angle* is an angle of less than 90° . An *obtuse angle* is an angle of more than 90° .

Name the angles. Write *acute*, *right*, or *obtuse*.

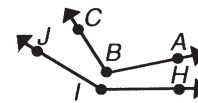
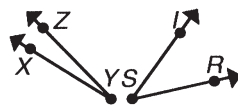
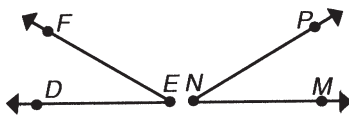
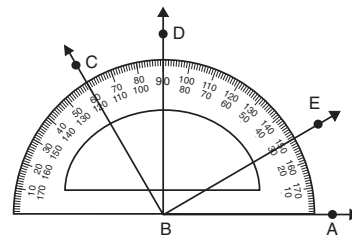


1. _____ 2. _____ 3. _____



4. _____ 5. _____ 6. _____

Use a protractor to measure each pair of angles. Tell whether the angles are congruent. Write *yes* or *no*.



7. _____ 8. _____ 9. _____

Angles

Answer Key

1. obtuse
2. acute
3. right
4. acute
5. obtuse
6. right
7. yes
8. no
9. no

