


# TAKING YOUR MEASURE

 Circle the more reasonable answer.

1.



- a. 2 cm    b. 20 cm

2.




- a. 6 dm    b. 6 cm

3.



- a. 1 dm    b. 10 dm

 Choose the appropriate unit for each. Write **centimeter**, **decimeter**, **meter**, or **kilometer**.



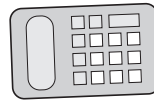
4. height of your desk \_\_\_\_\_




5. height of a flag pole \_\_\_\_\_



6. length of a road \_\_\_\_\_



7. length of a calculator \_\_\_\_\_

 Circle the longer unit.

8. 5 cm or 5 dm    9. 10 m or 10 dm    10. 16 km or 16 dm    11. 2 m or 2 cm

## Real World Connection

Write the number sentence and solve.

12. Enrique swims 7 km a day for 1 week. How many km does he swim in that period of time?

\_\_\_\_\_



# Taking Your Measure

## Answer Key

---

1. 2 cm
2. 6 cm
3. 1 dm
4. decimeter or centimeter
5. meter
6. kilometer
7. centimeter
8. 5 dm
9. 10 m
10. 16 km
11. 2 m
12. 49 km

