







# DON'T FORGET YOUR CHANGE





**Use play money. Circle your estimate for change. List the coins and bills you would receive in change.**

	Paid	Cost of Item	Estimate	Change
1.			more than \$0.50 less than \$0.50	_____
2.			more than \$0.25 less than \$0.25	_____
3.			more than \$2.00 less than \$2.00	_____



**Use play money. List the least number and type of coins you would receive in change from a \$1 bill.**

- |    |   |    |   |
|----|---|----|---|
| 4. |  | 5. |  |
|    | _____   |    | _____   |
|    | _____   |    | _____   |



**Write the number sentence, and solve.**

6. Bart bought a gift for \$7.79. He gave the clerk a \$10 bill. Should he receive more or less than \$2.00 in change?
- \_\_\_\_\_



# Don't Forget Your Change

## Answer Key

---

1. more than \$0.50; \$0.58
2. less than \$0.25; \$0.22
3. more than \$2.00; \$2.53
4. 1 quarter, 1 dime, 1 nickel, 2 pennies
5. 1 quarter, 2 pennies
6.  $\$10.00 - \$7.79 = \$2.21$ ; more

