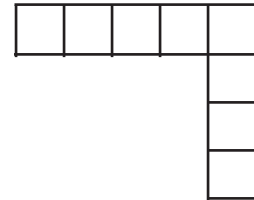
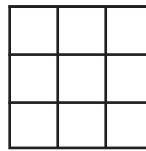


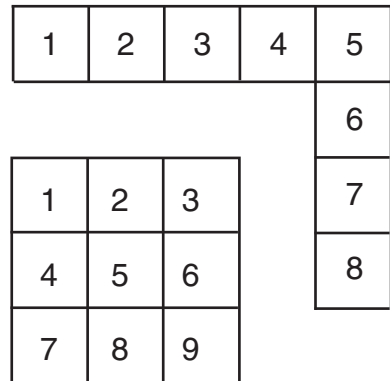
FINDING AREA

Which of the two figures has the larger area?



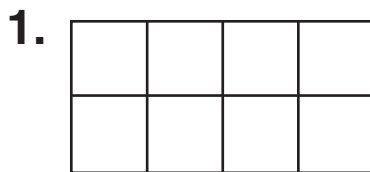
Remember


The area of a figure is the number of square units that cover its surface. You can count square units to find the area of a figure. The area of the L-shaped figure is 8 square units. The area of the square is 9 square units.

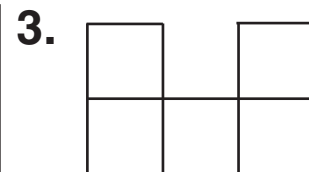



The square has the larger area.

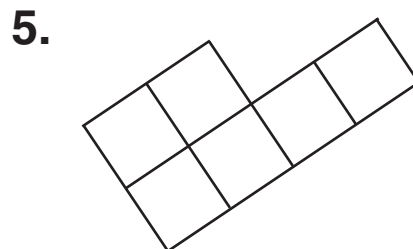
Count to find the area in square centimeters.

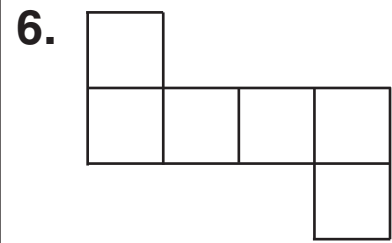












Finding Area

Answer Key

1. 8 square centimeters
2. 6 square centimeters
3. 5 square centimeters
4. 3 square centimeters
5. 6 square centimeters
6. 6 square centimeters

