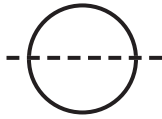
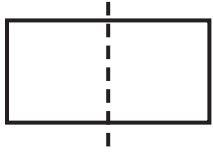


IDENTIFYING SYMMETRY

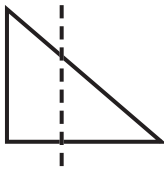


line of symmetry

not a line of symmetry

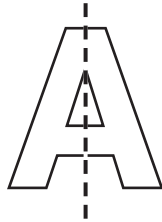
Is the line a line of symmetry? Ring yes or no.

1.



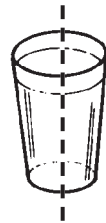
yes no

2.



yes no

3.



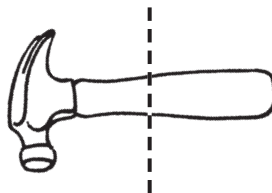
yes no

4.



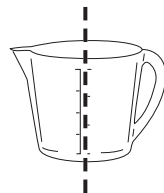
yes no

5.



yes no

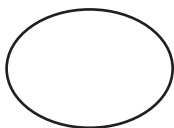
6.



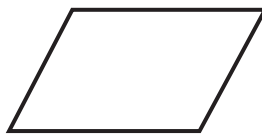
yes no

Draw a line of symmetry.

7.



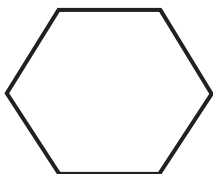
8.



9.



10.



11.



Identifying Symmetry

Answer Key

1. no
2. yes
3. yes
4. yes
5. no
6. no
- 7.–11. Check for lines of symmetry.

