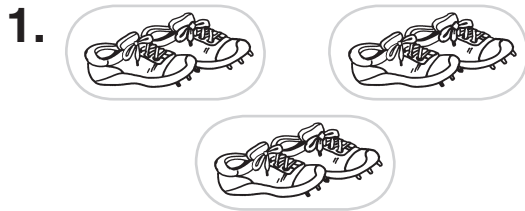


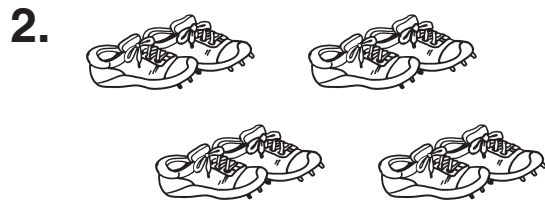
GOODY 2 SHOES



Circle groups of 2 shoes. Complete the sentences.




$2 + 2 + 2 = \underline{6}$
 3 equal groups of 2 = 6
3 \times 2 = 6



$2 + 2 + 2 + 2 = \underline{\quad}$
 4 equal groups of 2 =
 \times 2 =



$2 + 2 = \underline{\quad}$
 2 equal groups of 2 =
 \times 2 =



$2 + 2 + 2 + 2 + 2 = \underline{\quad}$
 5 equal groups of 2 =
 \times 2 =

Real World Connection

Write a number sentence and solve.

5. There were 6 boxes of shoes. In each box there were 2 shoes. How many shoes were there?

 \times =
 shoes



Goody 2 Shoes

Answer Key

1. 6; 6; $3 \times 2 = 6$
2. 8; 8; $4 \times 2 = 8$
3. 4; 4; $2 \times 2 = 4$
4. 10; 10; $5 \times 2 = 10$
5. $6 \times 2 = 12$; 12

