
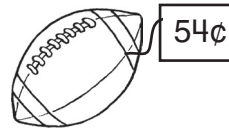

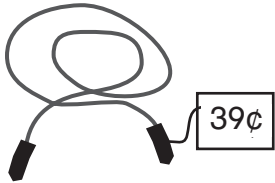


TOYING WITH PROBLEM SOLVING

 Use the pictures to solve.



1. Kim bought a football and a jump rope.
How much did she spend? 93 ¢

Show your work.

$$\begin{array}{r} 54 \text{ ¢} \\ + 39 \text{ ¢} \\ \hline 93 \text{ ¢} \end{array}$$

2. Ms. Tuma bought a jump rope and a dinosaur.
How much did she spend? _____ ¢

Show your work.

$$\begin{array}{r} ____ \text{ ¢} \\ + ____ \text{ ¢} \\ \hline ____ \text{ ¢} \end{array}$$

3. Carlos spent more than 60¢ on one toy.
Which toy did he buy? Circle the answer.

jump rope dinosaur football car

4. Mark has 95¢. He wants to buy a car and a jump rope. Does he have enough money? Circle Yes or No.

Yes No

Toying with Problem Solving

Answer Key

1. 93¢
2. 83¢
3. car
4. no

