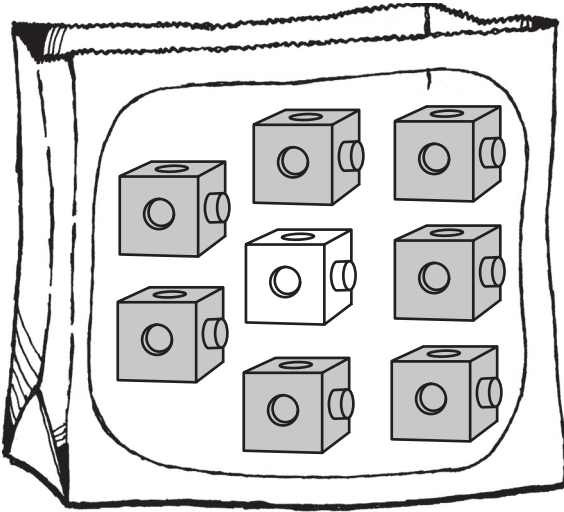


MOST LIKELY



I took a cube from this bag 10 times. I got red more often than blue.

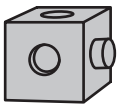


There are 7 red cubes and 1 blue cube.

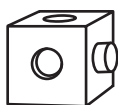
You will need: a bag, 3 red cubes, and 5 blue cubes

Predict which color cube you will get more often if you take one from this bag 10 times.

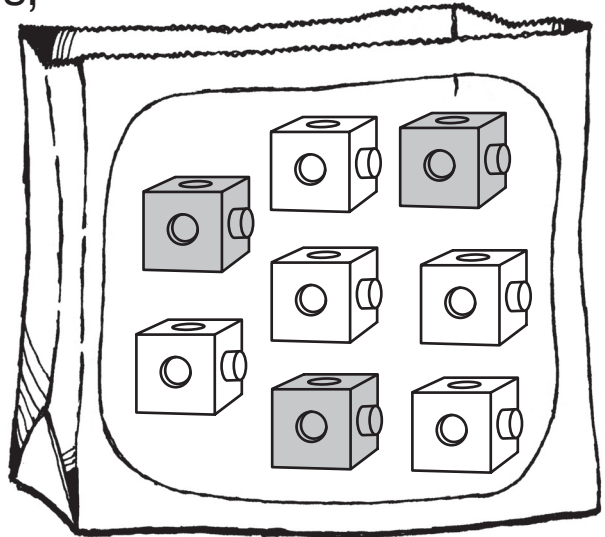
Circle that cube.



red

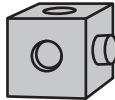
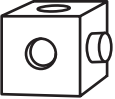


blue



Try it. Take out a cube.
Make a tally mark.
Put the cube back.
Shake.

Do this 9 more times.
Count. Write the totals.

	Tally Marks	Total
 red		
 blue		

Most Likely

Answer Key

Answers will vary.

