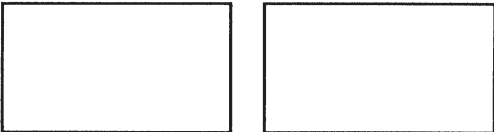

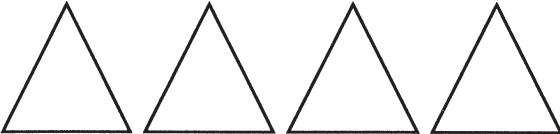



"BEARLY" A GROUP

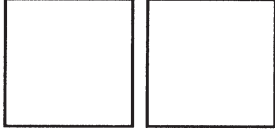
 Color to show each fraction.

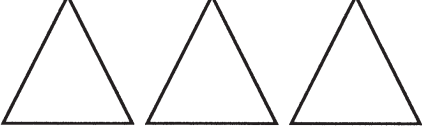
1. 
 $\frac{1}{2}$ blue



2. 
 $\frac{1}{4}$ red

3. 
 $\frac{1}{3}$ yellow

4. 
 $\frac{1}{2}$ purple, $\frac{1}{2}$ orange

5. 
 $\frac{1}{3}$ green, $\frac{1}{3}$ red, $\frac{1}{3}$ blue

Real World Connection

Solve.

6. There were 3 bears at the zoo. Kayla saw this bear. Write the fraction that tells what part of the group of the bears Kayla saw.

$$\frac{\bigcirc}{\bigcirc}$$


“Bearly” a Group

Answer Key

1.–5. Check fractions.

6. $\frac{1}{3}$

