


Name _____


Exploring Weight

Ounce and Pound

Which unit of measure would you use to weigh each item? Write *ounce* or *pound*.


1.  _____


2.  _____

3.  _____

4.  _____

Ring the better estimate.

5. 1 pound
or
1 ounce 

6. 8 ounces
or
8 pounds 

7. 25 ounces
or
25 pounds 

8. 10 ounces
or
10 pounds 

Solve.

9. A can with 3 tennis balls weighs 14 ounces. Do the tennis balls weigh *more than* or *less than* 1 pound?

10. Su-Lyn wears 2 wrist weights that weigh 12 ounces each. What is the total weight of the wrist weights?

MIXED REVIEW

Find the product or quotient.

1. $4 \times 9 =$ _____ 2. $72 \div 8 =$ _____ 3. $8 \times 7 =$ _____ 4. $14 \div 7 =$ _____

5. $7 \overline{)63}$ 6. $9 \overline{)72}$ 7. $3 \overline{)24}$ 8. $5 \overline{)40}$ 9. $9 \overline{)18}$ 10. $6 \overline{)6}$

Exploring Weight Ounce and Pound

Answer Key

1. ounce
2. pound
3. ounce
4. pound
5. 1 pound
6. 8 ounces
7. 25 pounds
8. 10 ounces
9. less than
10. 24 ounces or 1 pound 8 ounces

Mixed Review

1. 36
2. 9
3. 56
4. 2
5. 9
6. 8
7. 8
8. 8
9. 2
10. 1

