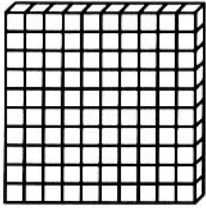


Name _____


Exploring Decimals

Make a model for each decimal. Then write each decimal in words.

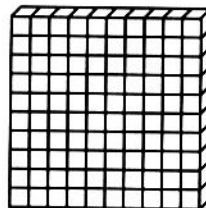
1. 0.16




2. 0.5



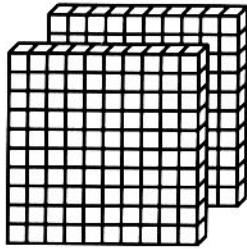
3. 0.75



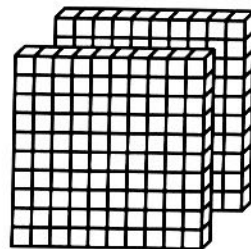
4. 0.8



5. 1.42



6. 1.07



Write each decimal.

7. four tenths

8. twenty-two hundredths

9. four and eighty-six hundredths

10. two and six tenths

11. five hundredths

12. seven tenths

NUMBER SENSE

Complete the patterns.

13. 1.2, 1.3, 1.4, _____, _____, _____, _____, 1.9

14. 2.10, 2.13, _____, _____, 2.22, _____, _____, 2.31

15. 46.35, 46.40, _____, _____, _____, 46.60, 46.65, _____

Exploring Decimals

Answer Key

- 1.–6. Check drawings.
 1. sixteen hundredths
 2. five tenths
 3. seventy-five hundredths
 4. eight tenths
 5. one and forty-two hundredths
 6. one and seven hundredths
7. 0.4
8. 0.22
9. 4.86
10. 2.6
11. 0.05
12. 0.7
13. 1.5, 1.6, 1.7, 1.8
14. 2.16, 2.19, 2.25, 2.28
15. 46.45, 46.50, 46.55, 46.70

