


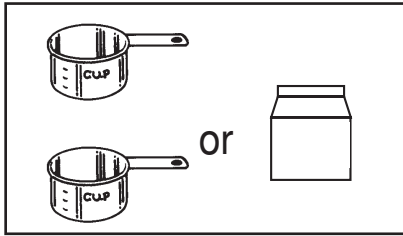
Name _____

Using Cups, Pints, and Quarts

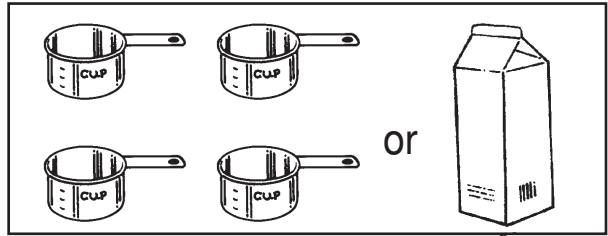
1 cup



1 pint



1 quart



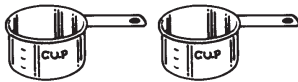
2 cups = 1 pint

4 cups = 1 quart

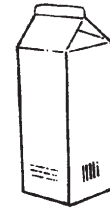



Count the cups. Color the containers that hold the same amount.

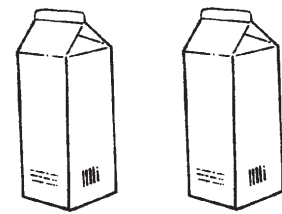
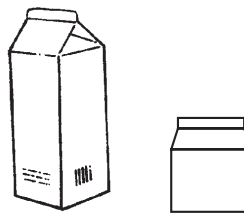
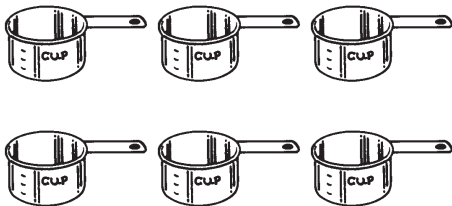
1.




2.



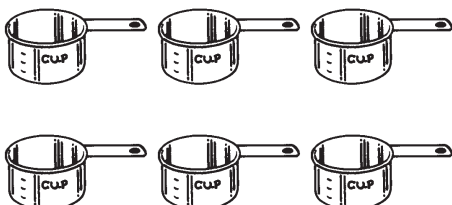
3.



4.



5.



Using Cups, Pints, and Quarts

Answer Key

1. Students color 1 pint.
2. Students color 1 quart.
3. Students color 1 quart and 1 pint.
4. Students color 2 pints.
5. Students color 3 pints.

