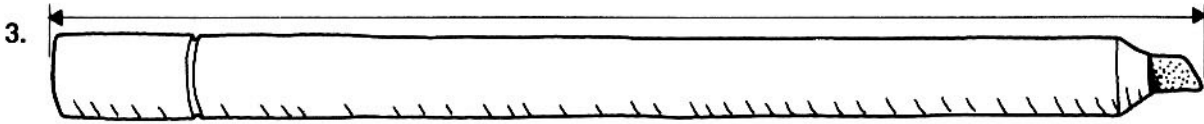
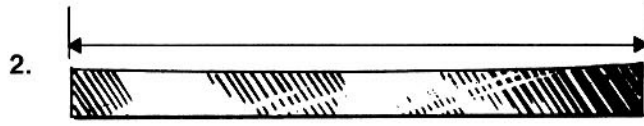
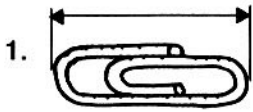


Name _____

Exploring Length Inch

Manipulatives

Measure the length of each in inches.



Draw each length from the •.

4. 2 inches •

5. 1 inch •

6. 4 inches •

7. Find two things in your home that measure about 9 inches each.

Mixed Applications

8. Marcy's ribbon is 12 inches long. She cuts a 9-inch piece to tie into a bow. How much ribbon is left?

9. Jorge connects 2-inch paper clips to make a chain. How long is Jorge's chain if he uses 5 paper clips?

LOGICAL REASONING

10. Yoshi glues his report to a piece of colored paper. The report paper is 8 inches wide and 10 inches long. The colored paper makes a 1-inch border around the report paper. How wide is the colored paper?



Exploring Length Inch

Answer Key

1. 1 in.
2. 3 in.
3. 6 in.
- 4.–6. Check lines.
7. Accept reasonable answers.
8. 3 in.
9. 10 in.
10. 10 in. wide

