



Name \_\_\_\_\_

# To the Minute

You can tell time to the minute.



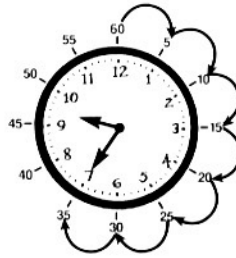
The minute hand is on the 12. The hour hand is on the 9. It is 9:00.



Count by 5's from the 12 to the 2 to find the number of minutes that have passed.

Think: "5, 10."

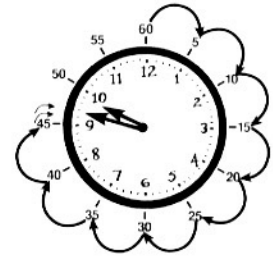
It is 9:10.



Count by 5's from the 12 to the 7.

Think: "5, 10, 15, 20, 25, 30, 35."

It is 9:35.



Count by 5's from the 12 to the 9. Count the last two minute marks by 1.

Think: "5, 10, 15, 20, 25, 30, 35, 40, 45, 46, 47."

It is 9:47.

Circle the correct time.

1.



- 5:13
- 4:18
- 4:15

2.



- 9:27
- 10:27
- 10:25

Write the correct time.

3.



\_\_\_\_\_

4.



\_\_\_\_\_

5.



\_\_\_\_\_

# To the Minute

## Answer Key

---

1. 4:18
2. 10:27
3. 11:13
4. 6:43
5. 12:12

