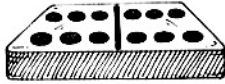


Name _____


..... **DOUBLE THE FUN**

 Find the sum.

1. $\begin{array}{r} 6 \\ + 6 \\ \hline \end{array}$



2. $\begin{array}{r} 4 \\ + 5 \\ \hline \end{array}$



3. $\begin{array}{r} 3 \\ + 3 \\ \hline \end{array}$

4. $\begin{array}{r} 7 \\ + 8 \\ \hline \end{array}$

5. $\begin{array}{r} 6 \\ + 9 \\ \hline \end{array}$

6. $\begin{array}{r} 8 \\ + 5 \\ \hline \end{array}$

7. $\begin{array}{r} 9 \\ + 8 \\ \hline \end{array}$

8. $\begin{array}{r} 2 \\ + 3 \\ \hline \end{array}$

9. $\begin{array}{r} 5 \\ + 5 \\ \hline \end{array}$

10. $\begin{array}{r} 6 \\ + 7 \\ \hline \end{array}$

11. $\begin{array}{r} 3 \\ + 8 \\ \hline \end{array}$

12. $\begin{array}{r} 2 \\ + 2 \\ \hline \end{array}$

13. $\begin{array}{r} 8 \\ + 7 \\ \hline \end{array}$

14. $\begin{array}{r} 4 \\ + 7 \\ \hline \end{array}$

15. $5 + 8 = \underline{\quad}$

16. $6 + 5 = \underline{\quad}$

17. $4 + 4 = \underline{\quad}$

18. $8 + 9 = \underline{\quad}$

19. $5 + 9 = \underline{\quad}$

20. $7 + 7 = \underline{\quad}$

21. $9 + 7 = \underline{\quad}$

22. $7 + 6 = \underline{\quad}$

23. $9 + 9 = \underline{\quad}$

24. $8 + 8 = \underline{\quad}$

25. $4 + 5 = \underline{\quad}$

26. $8 + 6 = \underline{\quad}$

27. $5 + 5 = \underline{\quad}$


28. $6 + 6 = \underline{\quad}$

29. $7 + 8 = \underline{\quad}$

Real World Connection

Write the number sentence and solve.

30. Linda and Marie collect stamps. Linda has 8 stamps. Marie has one more than Linda. How many stamps do the girls have together?



Double the Fun

Answer Key

- | | |
|--------|-------------------------|
| 1. 12 | 20. 14 |
| 2. 9 | 21. 16 |
| 3. 6 | 22. 13 |
| 4. 15 | 23. 18 |
| 5. 15 | 24. 16 |
| 6. 13 | 25. 9 |
| 7. 17 | 26. 14 |
| 8. 5 | 27. 10 |
| 9. 10 | 28. 12 |
| 10. 13 | 29. 15 |
| 11. 11 | 30. $8 + 9 = 17$ stamps |
| 12. 4 | |
| 13. 15 | |
| 14. 11 | |
| 15. 13 | |
| 16. 11 | |
| 17. 8 | |
| 18. 17 | |
| 19. 14 | |

