


Name _____


Dollar and Cents

Ring how much money is needed.


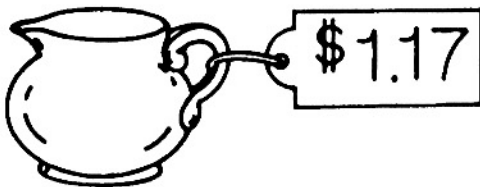
1.





2.



3.



4.



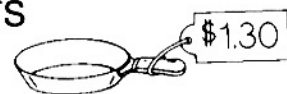
Problem Solving

5. Nick has 1 dollar and 3 nickels. Lola has 5 quarters. Write how much each child has. Then ring the greater amount.

Nick has _____

Lola has _____

6. Debra has _____
She wants to buy _____



Does she have enough money?

Ring **Yes** or **No**.

Yes

No

Dollar and Cents

Answer Key

- 1.–4. Check work.
5. \$1.15; ring \$1.25
6. Yes

