



Name \_\_\_\_\_

# Counting On from 50¢


Count on. Write the total amount.

1.   
50 ¢ 75 ¢ 80 ¢ 85 ¢ 85 ¢


---

2.   
\_\_\_\_\_ ¢ \_\_\_\_\_ ¢ \_\_\_\_\_ ¢ \_\_\_\_\_ ¢  ¢

---

3.   
\_\_\_\_\_ ¢ \_\_\_\_\_ ¢ \_\_\_\_\_ ¢ \_\_\_\_\_ ¢  ¢

---


4.   
\_\_\_\_\_ ¢ \_\_\_\_\_ ¢ \_\_\_\_\_ ¢ \_\_\_\_\_ ¢ \_\_\_\_\_ ¢  ¢

---

## Visual Thinking

5. Tran has 58¢ in all.  
What coins are left in her bank?  
Write how many.  
Ring the coin name.

\_\_\_\_\_ dimes    \_\_\_\_\_ nickels    \_\_\_\_\_ pennies



# Counting On from 50¢

## Answer Key

---

1. 50; 75; 80; 85; 85
2. 50; 55; 56; 57; 57
3. 25; 50; 60; 65; 65
4. 25; 50; 75; 85; 86; 86
5. 3 pennies

