

Name \_\_\_\_\_



















PROBLEM SOLVING

# Using a Graph

Darcy made a table to show how many trees she saw at the park.

She drew  for 2 trees.

## HOW MANY TREES?

Kind of tree	Number of trees
	  
	   
	 
	    

How many trees? Write the number.

1.  8      2.  \_\_\_\_\_

3.  \_\_\_\_\_      4.  \_\_\_\_\_

5. How many more  than  ? \_\_\_\_\_

6. How many more  than  ? \_\_\_\_\_

# Using a Graph

## Answer Key

---

1. 8
2. 4
3. 6
4. 10
5. 2 more
6. 4 more

