

Name _____

Counting Pennies

Write how much.

1.



3 ¢

2.




_____ ¢

3.



_____ ¢

4.




_____ ¢

5.



_____ ¢

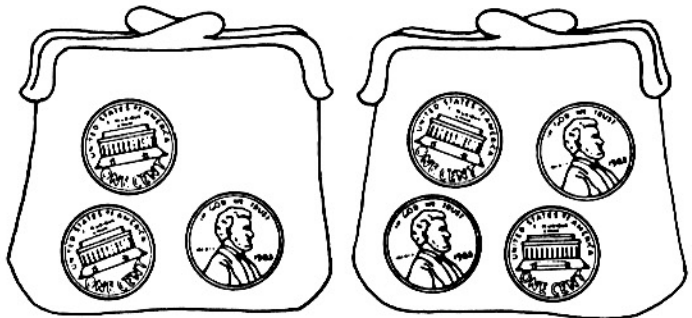
6.



_____ ¢

Number Sense

7. Look at each purse. Ring the purse that has more pennies. Draw an X on the purse that has fewer pennies.



Counting Pennies

Answer Key

1. 3
2. 4
3. 2
4. 5
5. 4
6. 3
7. Ring second purse; draw an X on the first purse.

